



### Revision worksheet 3

Grade : 2

Subject: Math

Name: \_\_\_\_\_

Date:

I. **Fill in the blanks.** **(3X1=3)**

1. Monday comes before \_\_\_\_\_
2. There are \_\_\_\_\_ days in a week.
3. July month has \_\_\_\_\_ days.

II. **Answer the following** **(3X3=9)**

1. Write the time shown in the clock

1.



2.



3.






2. Read the table given below and answer the questions.



MUSICAL INSTRUMENTS	NUMBER
Violin	
Guitar	
Flute	

3. Count to get the number of each type of house. Fill the table.



HOUSES	NUMBER
HUTS 	
IGLOO 	
BUNGALOW 	

Activate Windows  
Go to Settings to activate Windows.

III. Answer the following

( 2X4=8)

1. Read the calendar to answer the questions.

### APRIL 2022

SUNDAY	MONDAY	TUESDAY	WEDNESDAY	THURSDAY	FRIDAY	SATURDAY
					<b>1</b>	<b>2</b>
<b>3</b>	<b>4</b>	<b>5</b>	<b>6</b>	<b>7</b>	<b>8</b>	<b>9</b>
<b>10</b>	<b>11</b>	<b>12</b>	<b>13</b>	<b>14</b>	<b>15</b>	<b>16</b>
<b>17</b>	<b>18</b>	<b>19</b>	<b>20</b>	<b>21</b>	<b>22</b>	<b>23</b>
<b>24</b>	<b>25</b>	<b>26</b>	<b>27</b>	<b>28</b>	<b>29</b>	<b>30</b>

1. Which month and year is the calendar sheet showing?


Month: \_\_\_\_\_ Year: \_\_\_\_\_

2. If Shyam's birthday is on the 28th, what day is it? \_\_\_\_\_

3. How many Saturdays does April 2022 have? \_\_\_\_\_

4. What is the first day of this month? \_\_\_\_\_

2. Look at the pictograph and answer the following.



a) How many lions are there?

---

b) How many elephants are there?

---

c) How many hippopotamuses are there?

---

d) How many zebras are there?

---